

Name _____

Date _____

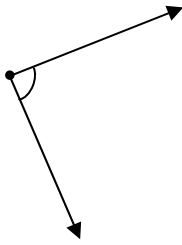
Estimating Measures of Angles - Independent Practice Worksheet

Complete all the problems. Write an estimate of the measure of each angle.


1.



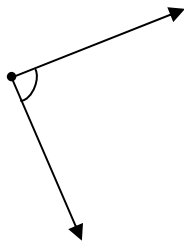
2.



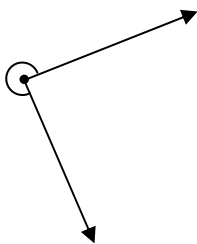
3.



4.



5.

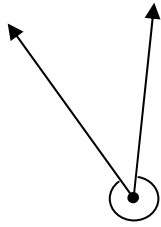




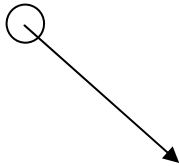
Name _____

Date _____

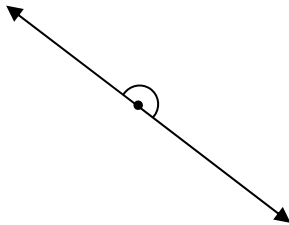
6.



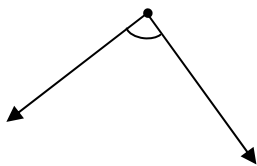
7.



8.



9.



10.

