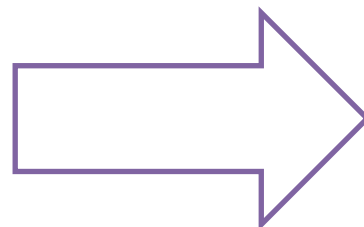






Name _____

Date _____

Valentine's Day Shape Symmetry

Instructions: On Valentine's Day, students will often draw hearts. Hearts are a symmetrical shape (meaning that you can draw a line down the middle and it is the same on both sides). The first one is done for you. Draw lines of symmetry on these other shapes.





Name _____

Date _____

Answer Key

Instructions: On Valentine's Day, students will often draw hearts. Hearts are a symmetrical shape (meaning that you can draw a line down the middle and it is the same on both sides). The first one is done for you. Draw lines of symmetry on these other shapes.



NOTE: THERE CAN BE MORE THAN ONE ANSWER FOR MANY OF THESE SHAPES. AS LONG AS IT IS A TRUE LINE OF SYMMETRY, ACCEPT IT AS A CORRECT ANSWER.

