

Summer Treats and Drinks while Estimating Sums

Directions: Choose the problem that correctly estimates the given sum.
Round to highest place value.



1.

Which problem has a sum of about 900?

$269 + 492$ $513 + 389$

$146 + 738$ $422 + 403$



3.

Which problem has a sum of about 1,600?

$841 + 895$ $788 + 967$

$931 + 674$ $544 + 909$




2.

Which problem has a sum of about 1,300?

$784 + 463$ $977 + 450$

$299 + 822$ $619 + 607$



4.

Which problem has a sum of about 1,800?

$989 + 835$ $973 + 952$

$874 + 823$ $826 + 788$



Name _____

Date _____



5.

Which problem has a sum of about 600?

$482 + 256$ $533 + 168$

$333 + 349$ $383 + 397$




7.

Which problem has a sum of about 2,300?

$1,082 + 1,960$ $1,852 + 320$

$978 + 863$ $1,212 + 996$



6.

Which problem has a sum of about 1,100?

$970 + 230$ $640 + 566$

$736 + 480$ $812 + 269$



8.

Which problem has a sum of about 3,000?

$2,874 + 1,410$

$1,801 + 1,489$

$1,732 + 1,985$

$2,013 + 1,632$



Summer Treats and Drinks while Estimating Sums

Answer Key

Directions: Choose the problem that correctly estimates the given sum.
Round to highest place value.



1.

Which problem has a sum of about 900?

- 269 + 492 513 + 389
 146 + 738 422 + 403



3.

Which problem has a sum of about 1,600?


- 841 + 895 788 + 967
 931 + 674 544 + 909



2.

Which problem has a sum of about 1,300?

- 784 + 463 977 + 450
 299 + 822 619 + 607



4.

Which problem has a sum of about 1,800?

- 989 + 835 973 + 952
 874 + 823 826 + 788



Name _____

Date _____



5.

Which problem has a sum of about 600?


- $482 + 256$ $533 + 168$
 $333 + 349$ $383 + 397$



7.

Which problem has a sum of about 2,300?

- $1,082 + 1,960$ $1,852 + 320$
 $978 + 863$ $1,212 + 996$



6.

Which problem has a sum of about 1,100?

- $970 + 230$ $640 + 566$
 $736 + 480$ $812 + 269$



8.

Which problem has a sum of about 3,000?

- $2,874 + 1,410$
 $1,801 + 1,489$
 $1,732 + 1,985$
 $2,013 + 1,632$

