

Name _____

Date _____

Celebrating Dad on Father's Day

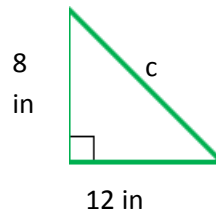
by Finding the Perimeter using Pythagorean Theorem

Directions: Use the Pythagorean Theorem to find the perimeter of the following triangles. Round to the nearest tenth.

DAD YOU'RE



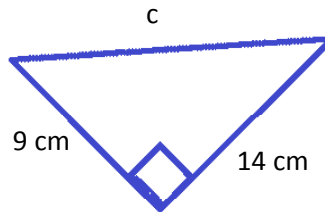
1.



Perimeter: _____



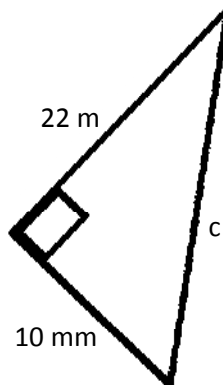
2.



Perimeter: _____



3.



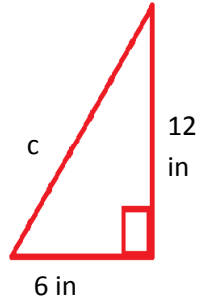
Perimeter: _____



Name _____

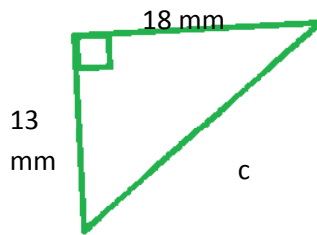
Date _____

4.



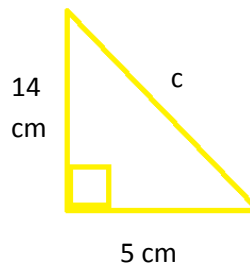
Perimeter: _____

5.



Perimeter: _____

6.



Perimeter: _____



Name _____

Date _____

Celebrating Dad on Father's Day

by Finding the Perimeter using Pythagorean Theorem

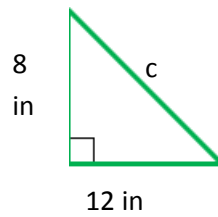
Answer Key

Directions: Use the Pythagorean Theorem to find the perimeter of the following triangles. Round to the nearest tenth.

DAD YOU'RE



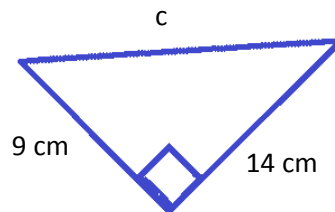
1.



Perimeter: 34.4



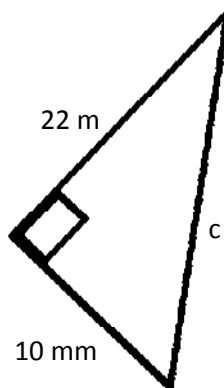
2.



Perimeter: 39.6



3.



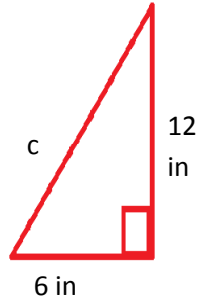
Perimeter: 56.2



Name _____

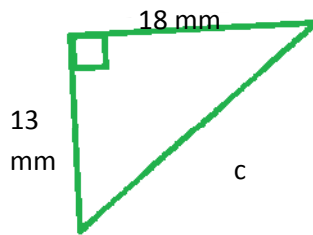
Date _____

4.



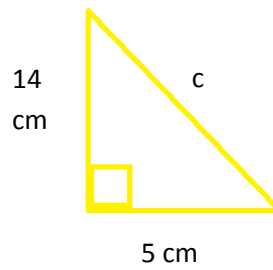
Perimeter: ~~31.4~~

5.



Perimeter: ~~53.2~~

6.



Perimeter: ~~33.9~~

