



Name _____

Date _____


Happy Father's Day! Finding the Mean, Median, Mode, & Range


Directions: Solve for the following.


1. Find the median
29, 19, 34, 23, 17, 39, 27, 18
Median _____

4. Find the mean
433, 501, 482, 522, 604, 522, 437
Mean _____

2. Find the range
97, 102, 89, 95, 113, 86, 92, 92, 86
Range _____

5. Find the mean
934, 934, 964, 852, 914, 875
Mean _____

3. Find the mode
841, 798, 864, 799, 841, 804, 826
Mode _____

6. Find the range
769, 844, 703, 900, 737, 1,032
Range _____



Name _____

Date _____

Happy Father's Day!

Finding the Mean, Median, Mode, & Range **Answer Key**



1.

Find the median

29, 19, 34, 23, 17, 39, 27, 18

Median **25**



4.

Find the mean

433, 501, 482, 522, 604, 522, 437

Mean **500.1**



2.

Find the range

97, 102, 89, 95, 113, 86, 92, 92, 86

Range **27**



5.

Find the mean

934, 934, 964, 852, 914, 875

Mean **912.2**



3.

Find the mode

841, 798, 864, 799, 841, 804, 826

Mode **841**



6.

Find the range

769, 844, 703, 900, 737, 1,032

Range **329**

