


Name _____


Date _____

Practicing Identifying Appropriate Length on Cinco de Mayo


Directions: Choose the correct estimation of length for the following.

1.  Which is a closer estimation for the length of a watermelon?

14 feet 14 inches

2.  Which is a closer estimation for the length of a chili pepper?

3 yards 3 inches

3.  Which is a closer estimation for the length of a bull fighter?

6 foot 6 inches



Name _____

Date _____



Which is a closer estimation
for the length of a soccer
field?

4.

100 inches

100 yards



Which is a closer estimation
for the length of an iguana?

5.

15 inches

15 yards



Which is a closer estimation
for the length of a donkey?

6.

5 yards

5 feet




Name _____

Date _____


Practicing Identifying Appropriate Length on Cinco de Mayo

Answer Key


Directions: Choose the correct estimation of length for the following.

1.  Which is a closer estimation for the length of a watermelon?

14 feet 14 inches

2.  Which is a closer estimation for the length of a chili pepper?

3 yards 3 inches

3.  Which is a closer estimation for the length of a bull fighter?

6 foot 6 inches



Name _____

Date _____



Which is a closer estimation
for the length of a soccer
field?

4.

100 inches

100 yards



Which is a closer estimation
for the length of an iguana?

5.

15 inches

15 yards



Which is a closer estimation
for the length of a donkey?

6.

5 yards

5 feet

