











Name: _____

Date: _____

Christmas Decoration Sales Statistics

The chart below displays Christmas decorations sold in the last 5 years at Sam's shop on 20th December.

	2008	2009	2010	2011	2012	Total
	12	15	28	16	9	80
	25	30	26	37	33	151
	16	23	22	28	42	131
	13	40	16	22	25	116
	22	22	31	43	42	160
	23	38	27	61	52	201
	10	15	23	26	35	109
Total	121	183	173	233	238	948








1. Which year had the greatest number of sales?
2. Which decoration was the best seller?
3. Which year showed the highest and the lowest sale of  ?
4. Between  and  , which item sold more over the entire range of years?

Name: _____

Date: _____

Statistics Answer Key

The chart below displays Christmas decorations sold in the last 5 years in Sam's shop on 20th December.

	2008	2009	2010	2011	2012	Total
	12	15	28	16	9	80
	25	30	26	37	33	151
	16	23	22	28	42	131
	13	40	16	22	25	116
	22	22	31	43	42	160
	23	38	27	61	52	201
	10	15	23	26	35	109
Total	121	183	173	233	238	948

1. Which year had the greatest number of sales?

Answer- 2012

2. Which decoration was the best seller?

Answer =



3. Which year showed the highest and the lowest sale of  ?

Highest= 2012, Lowest = 2008

4. Between  and  which item had more sale totally?

Answer =

