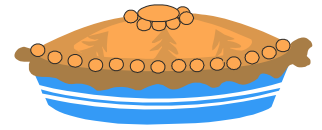


Name: _____


Date: _____

Christmas Fraction Word Problems

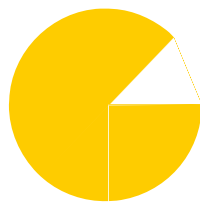
1. Ann baked a Christmas pie. She cut it into 8 equal pieces. She gave 2 pieces to Sam.



Which graphic resembles the remaining pie?



1



2



3



4

Answer: _____

2. Which graphic resembles the portion which Sam has?




2



3



4



1

Answer: _____

3. Ann gave Tracy 3 pieces of the pie. What fraction of the pie did Tracy get?

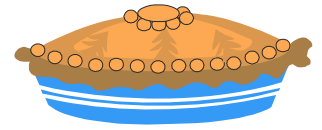
Answer: _____

Name: _____


Date: _____

Fractions- Answer

1. Ann baked a Christmas pie. She cut it into 8 equal pieces. She gave 2 pieces to Sam.



Which graphic resembles the remaining pie?



1


2

3

4

Answer: 3

2. Which graphic resembles the portion which Sam has?



2

3

4

1

Answer: 2

3. Ann gave Tracy 3 pieces of the pie. What fraction of the pie did Tracy get?

Answer: $\frac{3}{8}$