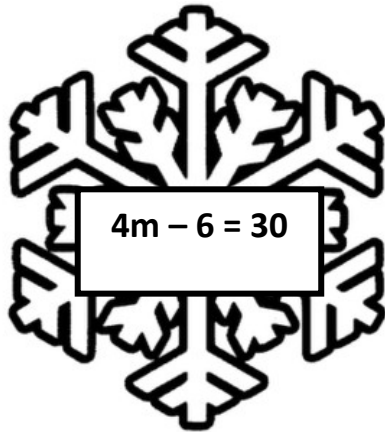


Name \_\_\_\_\_ Date \_\_\_\_\_

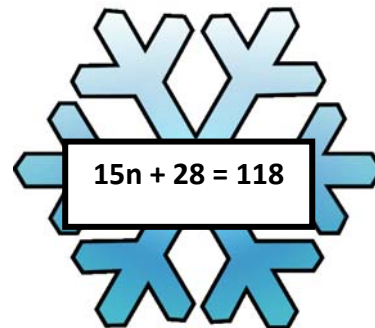
## Snowflakes and Solving 2 Step Equations

Directions: Solve the following 2-step equations.



1.

Answer: \_\_\_\_\_



2. Answer: \_\_\_\_\_

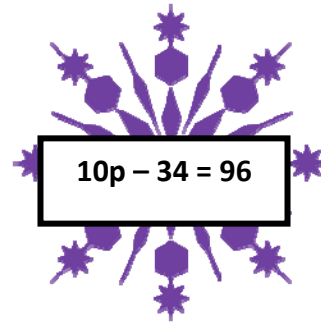


3.


Answer: \_\_\_\_\_

Name \_\_\_\_\_

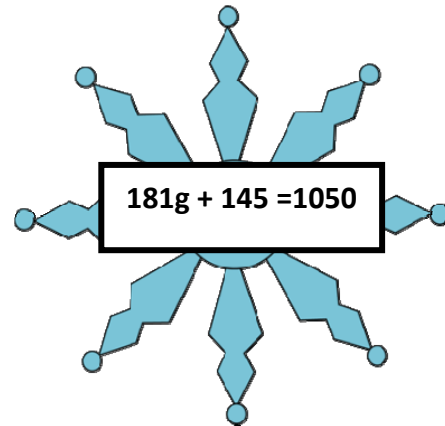
Date \_\_\_\_\_



4. Answer: \_\_\_\_\_



5. Answer: \_\_\_\_\_



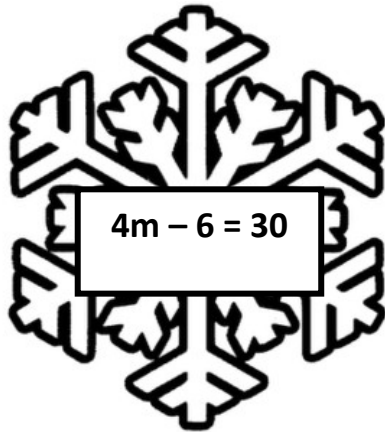
6. Answer: \_\_\_\_\_

Name \_\_\_\_\_ Date \_\_\_\_\_

## Snowflakes and Solving 2 Step Equations

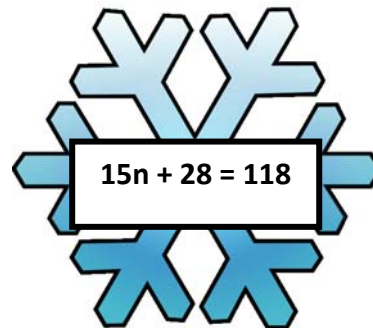
### Answer Key

Directions: Solve the following 2-step equations.

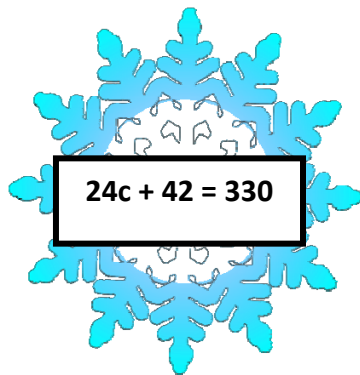


1.

Answer:  $m = 9$



2. Answer:  $n = 6$

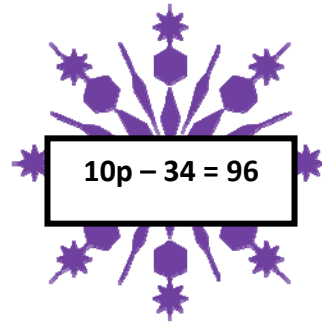


3.


Answer:  $c = 12$

Name \_\_\_\_\_

Date \_\_\_\_\_

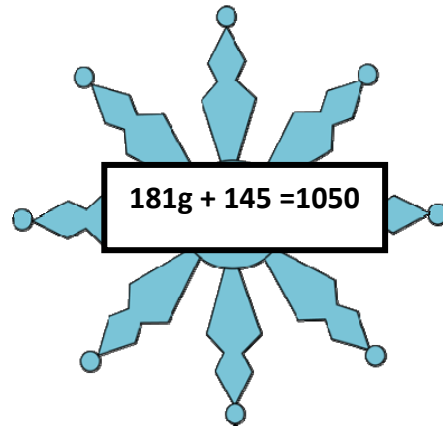


4. Answer:  $p = 13$



5.

Answer:  $h = 17$



6. Answer:  $g = 5$