


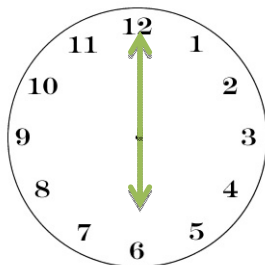
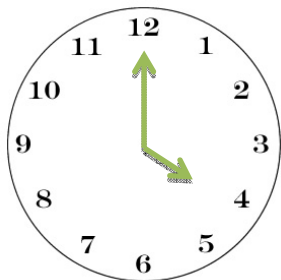
Name _____

Date _____

Saint Patrick's Day Telling Time First Grade Math, [CCSS.Math.Content.1.MD.B.3](#)



What time is the St. Patrick's Day party??



Teach Liam how to tell time, so he won't be late for the party:

1. Find the short / long hand. That tells the HOUR.

2. Find the short / long hand. That tells the MINUTES.



3. If the SHORT hand is on the 4, and the long hand is on the 12, the time is _____.



Invite Liam to your St. Patrick's Day party! Write the time of the party on the lines below, and also draw a picture of the time on the clock!

Dear Liam,

From,



Name _____

Date _____

Answer Key:

4:00

6:00

8:30

Short

Long

4:00

Two times should match (words, clock)

