

Name _____

Date _____


A Mother's Day Gift Solving Area of a Rectangle Problems

Directions: Find the area of the following rectangles.



1.

6 in



3 in

Answer: _____



2.

9 cm



5 cm

Answer: _____



3.

11 in



8 in

Answer: _____



Name _____

Date _____



4.

12 cm



8 cm

Answer: _____



5.

7 in



6 in


Answer: _____



6.

4 in

4 in



4 in

Answer: _____



Name _____

Date _____


A Mother's Day Gift Solving Area of a Rectangle Problems

Answer Key



1.

6 in



3 in

Answer: 18 in



2.

9 cm



5 cm

Answer: 45 cm



3.

11 in



8 in

Answer: 88 in



Name _____

Date _____



4.

12 cm



8 cm

Answer: 96 cm



5.

7 in



6 in


Answer: 42 in



6.

4 in

4 in



4 in

Answer: 16 in

