

Name _____ Date _____

Sleepy-time Groundhog Relationships between Squares and Square Roots

Directions: Solve for the following squares and square root problems.

1.



$$\sqrt{100^2} =$$

4.



$$\sqrt{54^2} =$$

2.



$$\sqrt{719^2} =$$

5.



$$\sqrt{490^2} =$$

3.



$$\sqrt{1,250^2} =$$

6.



$$\sqrt{6,327^2} =$$




Name _____ Date _____

Sleepy-time Groundhog Relationships between Squares and Square Roots

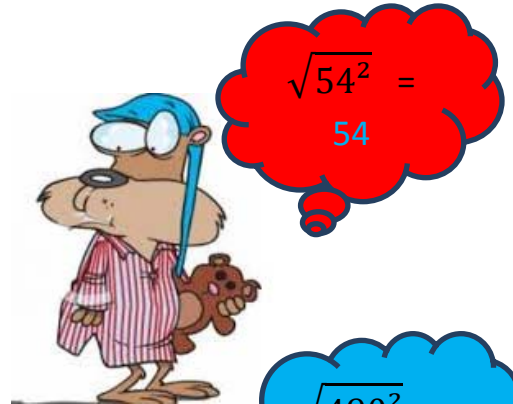
Answer Key

Directions: Solve for the following squares and square root problems.


1.



4.




2.



5.



3.



6.

